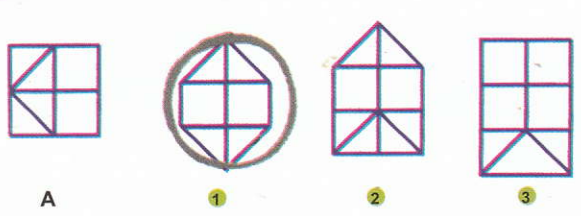
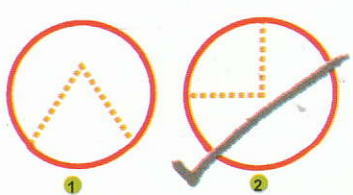



# IQ testai vaikams 2




A      1      2      3




1      2

# IQ testai vaikams 2

## SUDERINK



## SUJUNK



## NUPIEŠK



## PAGALVOK




## IŠKIRPK



## TRŪKSTA



## PANAŠŪS



UDK 087.5:159.9  
In-154

Iš anglų kalbos vertė Jūratė Žižytė  
Redagavo Rima Šovienė

Šis leidinys negali būti dauginamas be leidėjo sutikimo.  
Bet koks savavališkas dauginimas yra autorių teisių pažeidimas.

© 2007 Class Publishing House Co., Ltd., Tailandas

Pardavimo teisės: **Macaw Books (USA)**

[www.macawbooks.com](http://www.macawbooks.com)

Spausdinta Indijoje

© Laida lietuvių kalba, „Presvika“, 2007


Išleido leidykla „Presvika“, Kauno g. 28, 03202 Vilnius  
[www.presvika.lt](http://www.presvika.lt)

ISBN 978-9955-22-150-0



Sekdamas pateiktu pavyzdžiu, įrašyk į langelį reikiamo paveikslėlio skaičių.

**A**



①





②



③


**B**



①



②



③

**C**



①



②



③

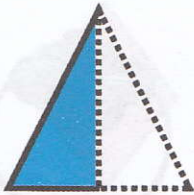







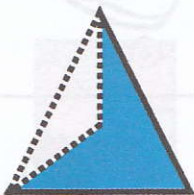







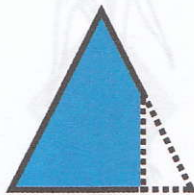









Pažiūrėk į penkis paveikslėlius ir į jiems priskirtus ženklus. Tuomet įrašyk tuos ženklus po paveikslėliais, pateiktais apačioje.

O	I	+	-	L




Atidžiai pažiūrėk į taškeliais nužymėtą figūros dalį. Surask ją tarp trijų figūrų, išdėstytų dešinėje lentelės pusėje.

 <p>A</p>	 <p>①</p>  <p>②</p>  <p>③</p>
 <p>B</p>	 <p>①</p>  <p>②</p>  <p>③</p>
 <p>C</p>	 <p>①</p>  <p>②</p>  <p>③</p>
 <p>D</p>	 <p>①</p>  <p>②</p>  <p>③</p>
 <p>E</p>	 <p>①</p>  <p>②</p>  <p>③</p>
 <p>F</p>	 <p>①</p>  <p>②</p>  <p>③</p>



Surask vieną išsiskiriantį paveiksluką, pavaizduotą kiekvienoje eilutėje.

**A**




①



②



③



④

**B**




①



②



③



④

**C**



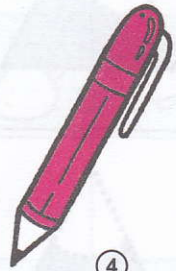
①



②




③

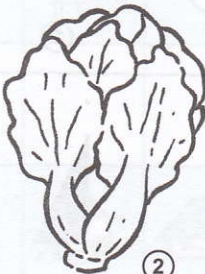


④

**D**




①



②




③



④

**E**



①



②










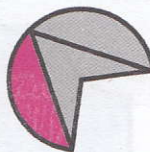
















③



④




Sujunk vienodu modeļu figūras abiejuosē stulpeliuose.

 <p><b>A</b></p>	 <p>①</p>	 <p>②</p>	 <p>③</p>
 <p><b>B</b></p>	 <p>①</p>	 <p>②</p>	 <p>③</p>
 <p><b>C</b></p>	 <p>①</p>	 <p>②</p>	 <p>③</p>
 <p><b>D</b></p>	 <p>①</p>	 <p>②</p>	 <p>③</p>
 <p><b>E</b></p>	 <p>①</p>	 <p>②</p>	 <p>③</p>
 <p><b>F</b></p>	 <p>①</p>	 <p>②</p>	 <p>③</p>




Atidžiai įsižiūrėk į paveikslėlius kairėje  
stulpelio pusėje. Išsiaiškink, kaip atrodys  
šios figūros vieną kartą jas perkirpus.  
Atpažink jas ir sujunk.



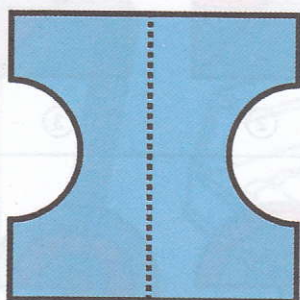
A

1





B

2





C

3



D

4



E

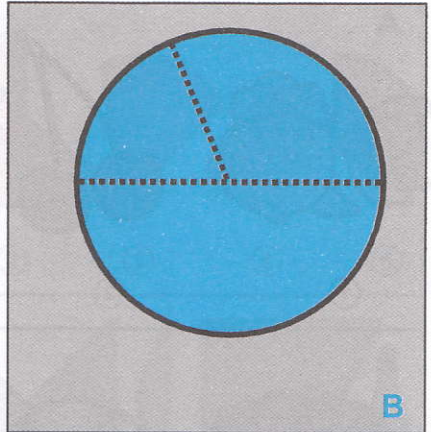
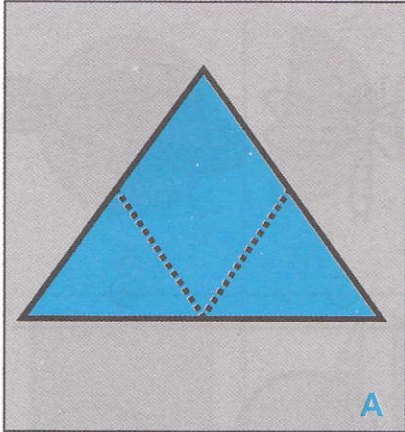
5








Atidžiai apžiūrēk A ir B figūras. Tada apibrauk nepanaudotā figūros daļi.




①



①



②



②



③




③



④




④




Penkiose paveikslukų eilutėse du paveikslėliai yra kažkuo tarpusavyje panašūs. Ar gali juos pažymėti?

**A**




①



②



③



④


**B**



①



②




③



④

**C**



①



②



③



④

**D**



①



②



③




④

**E**



①



②



③



④




Atidžiai pasižiūrėk į figūras, pateiktas kairėje pusėje. Išsiaiškink, kurios dvi dalys dešinėje sudarys figūrą kairėje pusėje.



**A**



①



②




③



④



⑤



**B**



①



②



③



④



⑤



**C**



①



②




③



④



⑤



**D**



①



②



③



④



⑤



**E**



①



②



③



④



⑤



**F**




①



②



③



④



Paveikslėlis skritulyje yra susijęs su vienu iš keturių paveikslėlių, pateiktų langelyje. Ar gali pažymėti vienintelį teisingą paveikslėlį?

**A**

1 2

3 4

**B**

1 2

3 4

**C**

1 2

3 4


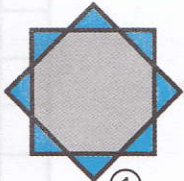
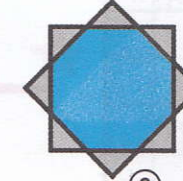
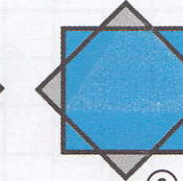
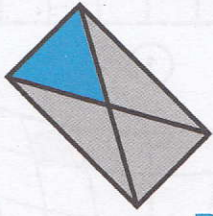
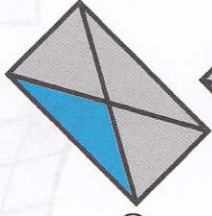
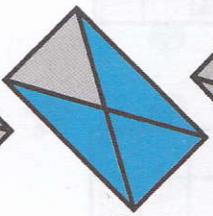
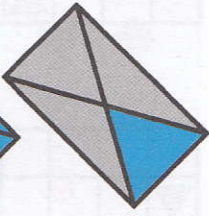


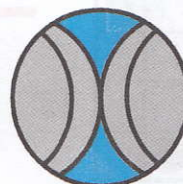
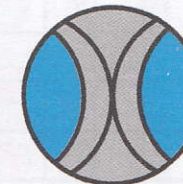


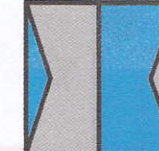







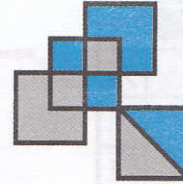

**D**

1 2

3 4

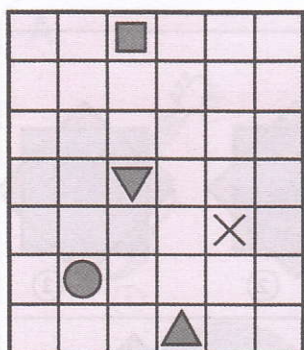


Sujunk vienodų modelių figūras abiejuose stulpeliuose.


 <p><b>A</b></p>	 <p>①</p>	 <p>②</p>	 <p>③</p>
 <p><b>B</b></p>	 <p>①</p>	 <p>②</p>	 <p>③</p>
 <p><b>C</b></p>	 <p>①</p>	 <p>②</p>	 <p>③</p>
 <p><b>D</b></p>	 <p>①</p>	 <p>②</p>	 <p>③</p>
 <p><b>E</b></p>	 <p>①</p>	 <p>②</p>	 <p>③</p>
 <p><b>F</b></p>	 <p>①</p>	 <p>②</p>	 <p>③</p>



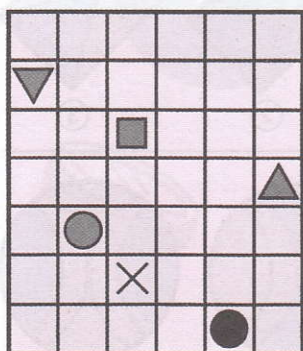
Atidžiai peržiūrēk figūras, pateiktas langeliuose. Ar gali, sekdamas duotuoju pavyzdžiu, perkelti tas figūras į gretimus langelius?



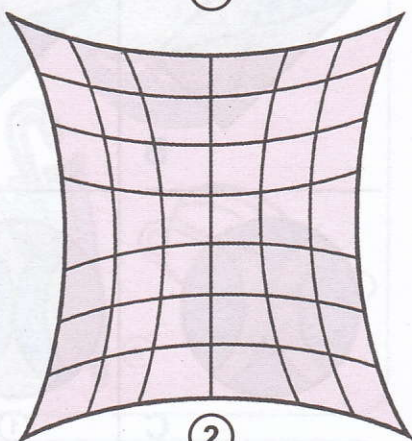
A




1



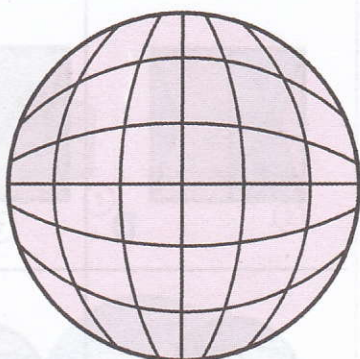
B




2



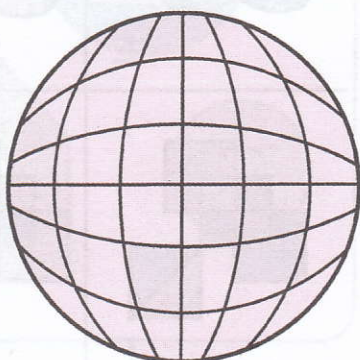
C



3



D



4


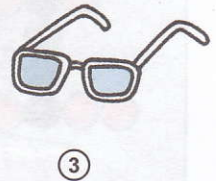


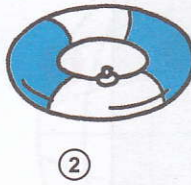

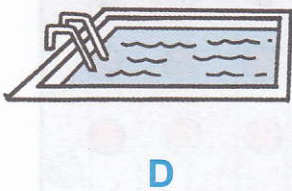

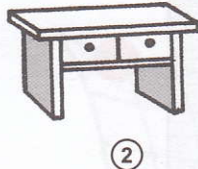
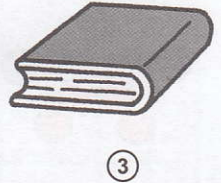



Ar gali išsiaiškinti, kokias figūras kairėje stulpelio pusėje sudarys dešinėje esantys skrituliukai? Atkreipk dėmesį į jų spalvas.

	<p><b>A</b> ★ 1</p>	
	<p><b>B</b> ★ 2</p>	
	<p><b>C</b> ★ 3</p>	
	<p><b>D</b> ★ 4</p>	
	<p><b>E</b> ★ 5</p>	
	<p><b>F</b> ★ 6</p>	




Vienas iš trijų paveiksliukų, duotų eilutėje, yra neabejotinai susijęs su paveikslėliu kairėje. Ar gali surasti tą paveiksliuką?







Jeigu sujungsime abi figūros dalis kairėje pusėje, kokia figūra bus suformuota? Pažymėk teisingąją figūrą dešinėje pusėje.




A




①



②




③




B



①




②




③




C




①



②



③




D




①



②




③




E



①



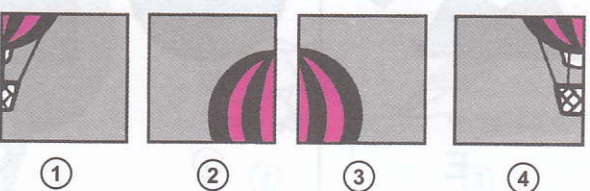

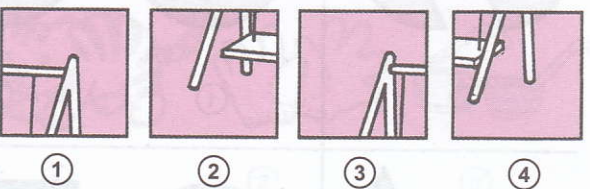
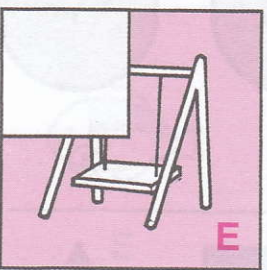
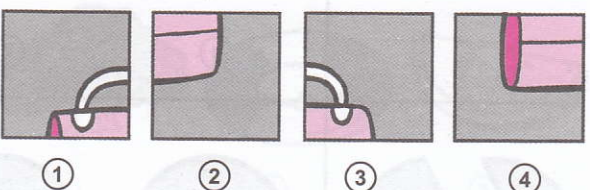

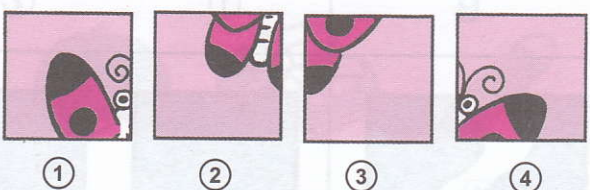
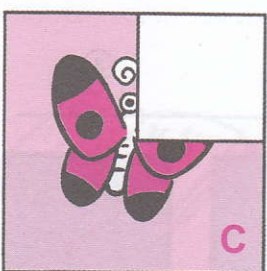
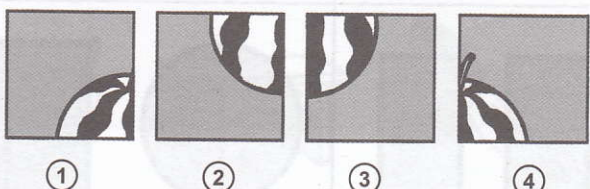


②



③







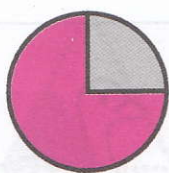





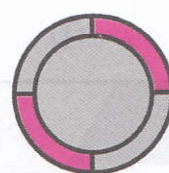













Atidžiai pasižiūrėk į nebaigtą paveikslėlį.  
Ar gali jį užbaigti pasirinkdamas vieną  
teisingą paveikslėlį iš keturių pateiktų?





Viena iš trijų duotų figūrų atitinka pradinę figūrą. Ar gali ją pažymėti?

Pažymėk teisingą variantą su žymėjimo priemonėmis.

 <p><b>A</b></p>	 <p>①</p>  <p>②</p>  <p>③</p>
 <p><b>B</b></p>	 <p>①</p>  <p>②</p>  <p>③</p>
 <p><b>C</b></p>	 <p>①</p>  <p>②</p>  <p>③</p>
 <p><b>D</b></p>	 <p>①</p>  <p>②</p>  <p>③</p>
 <p><b>E</b></p>	 <p>①</p>  <p>②</p>  <p>③</p>
 <p><b>F</b></p>	 <p>①</p>  <p>②</p>  <p>③</p>



Paveikslėlis kairėje pusėje yra neabejotinai susijęs su paveikslėliu dešinėje. Ar gali jį pažymėti?



A



1



2



3




B



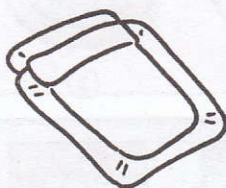
1



2



3



C



1




2



3



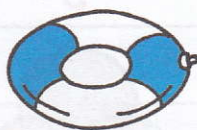
D



1



2



3



E



1




2



3



Jei kairėje pusėje esančią figūrą kirpsi per taškų linijas, kokia nauja figūra susidarys? Pažymėk teisingą paveikslėlį dešinėje pusėje.



A



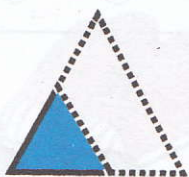
①



②



③




B




①



②



③



C



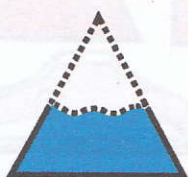
①



②



③



D




①



②



③



E




①



②



③



F



①



②




③




Apačioje pateikti penkių figūrų rinkiniai.  
Ar gali pažymėti kiekviename rinkinyje  
figūras, kurios sudėtos sudarys pagrindinę  
figūrą, esančią kairėje pusėje.




**A**




① ② ③ ④ ⑤




**B**



① ② ③ ④ ⑤




**C**




① ② ③ ④



**D**



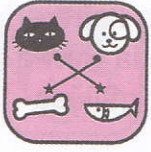
① ② ③ ④



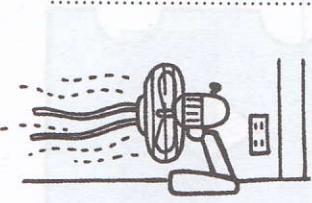
**E**




① ② ③ ④ ⑤



Kairėje esantys paveikslėliai neužbaigti. Jiems trūksta vienos dalies. Ar gali užbaigti paveikslėlius parinkdamas trūkstamą dalį iš dešinėje pusėje esančių paveikslėlių?




A



1



2




3



B



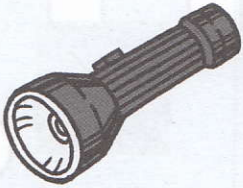
1



2



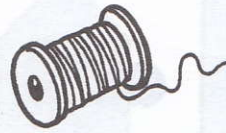
3



C



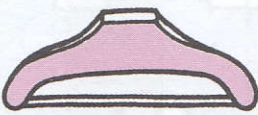
1



2



3




D



1



2



3




E



1



2




3



F



1




2



3





Išstudijuok paveikslukus, pateiktus kairėje stulpelio pusėje. Dabar surask, kokią formą šios figūros sudarys išskleistos. Ar gali jas sujungti?





A

1





B

2




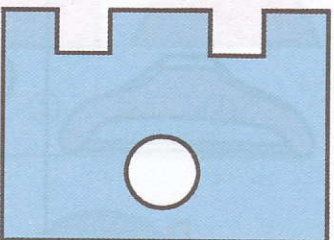
C

3





D

4




E

5



F


6








Pasižūrēk ī figūras dešinēje. Dabar apibrauk tā figūra, kurios dalys sudarys esančią kairēje pusēje.



A



①




②



③



B



①



②




③



C



①



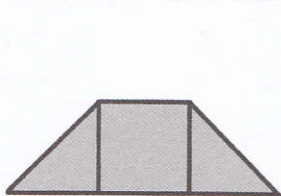
②



③



D




①



②



③



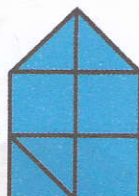
E




①



②




③




F




①



②



③



Mažieji sniego seniai žiūri į veidrodį.  
Bet jie pasimetė ir nebegali atskirti, kas  
yra kas. Ar gali jiems padėti – pažymėti  
jų atvaizdus?



A


B

C

1

2

3





D

E

F



4

5

6






Trijuose paveikslėlių rinkiniuose, duotuose apačioje, du paveikslėliai neabejotinai panašūs. Ar gali pažymėti šiuos paveikslėlius?


A



B




C





Šešiuose paveikslėlių rinkiniuose, pateiktuose apačioje, vienas paveikslėlis nesusijęs su kitais dviem. Ar gali rasti netinkamą paveikslėlį?

A



1



2




3

B



1



2



3

C



1



2



3

D



1



2



3

E



1

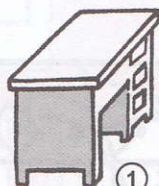


2




3


F



1



2



3



Sudėk kaladėles, trūkstamą dalį surask tarp keturių šalia pateiktų kaladėlių.

A




①



②




③




④

B




①



②

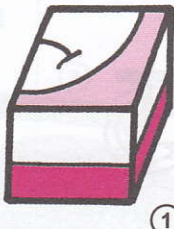



③



④


C



①



②



③


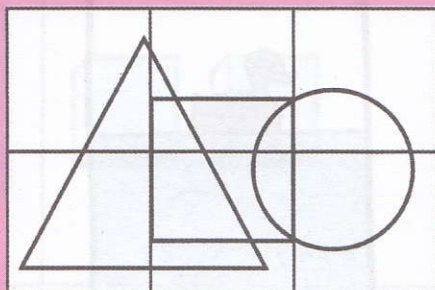


④




Atidžiai apžiūrėk aštuonias figūras, pateiktas A ir B dalyse. Dabar kiekvienoje dalyje (A ir B) surask dvi figūras, kurių nėra sudarytame pavyzdyje, pateiktame viršuje.


A




1




2



3




4




5



6

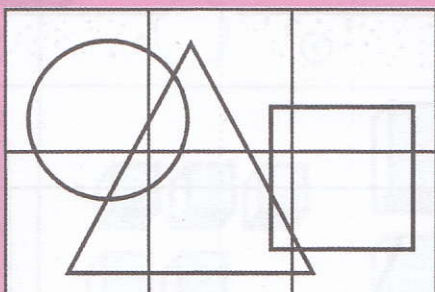


7




8


B



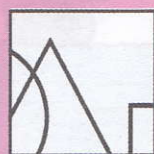
1



2




3




4




5



6



7





8



Mažas žaislinis ančiukas plaukiojo stikliniame inde. Jonas netyčia, nepagalvojęs apie ančiuką, palenkė stiklinį indą. Ar gali nurodyti kryptį, kur ančiukas plauks?


A




1



2



3

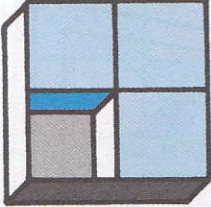


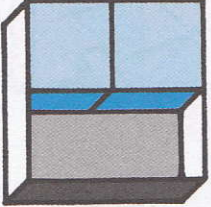
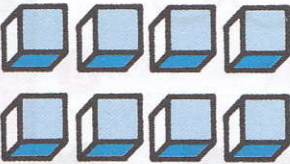


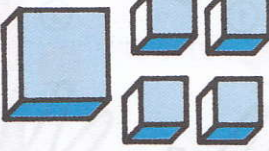


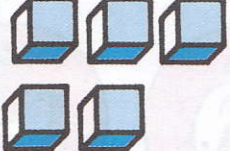
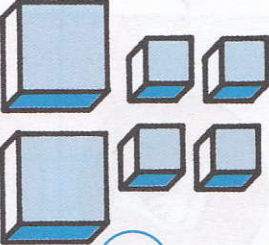

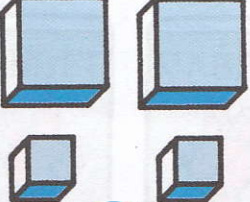
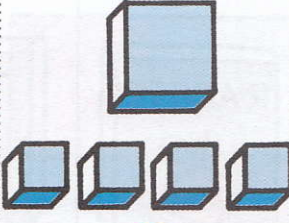


4






Ar gali sudaryti neužbaigtas figūras?  
Pažymėk tas dalis, kurios, tavo manymu,  
užbaigs pradinę figūrą.

 <p>A</p>	 <p>①</p>	 <p>②</p>
 <p>B</p>	 <p>①</p>	 <p>②</p>
 <p>C</p>	 <p>①</p>	 <p>②</p>
 <p>D</p>	 <p>①</p>	 <p>②</p>
 <p>E</p>	 <p>①</p>	 <p>②</p>



Ar gali pažymėti pateiktų daiktų atvaizdus veidrodyje.



A



1



2



3



B



1



2



3



C




1




2



3




D



1




2



3





Padalyk dešiniųjų figūrų rožinį plotą į keturias lygias dalis ir surask jų atitikmenį figūrose, pateiktose kairiajame stulpelyje.





A

1





B

2



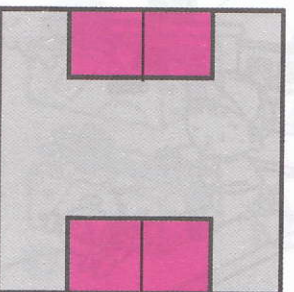

C

3




D

4



E





5








Pažymėk paveikslėlį, kuris yra visiškai toks pat, kaip ir paveikslėlis užtamsintame langelyje.

A





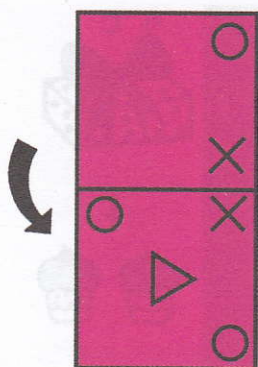
Keturiuose paveikslukų rinkiniuose, pateiktuose apačioje, sužinok, kiek pyragėlių telpa į dėžutes.



<p><b>1</b></p>	
<p><b>2</b></p>	
<p><b>3</b></p>	
<p><b>4</b></p>	




Sulenok pavyzdžius, esančius kairėje  
stulpelio pusėje. Atrask, kokios figūros,  
esančios stulpelio dešinėje, susidarys.



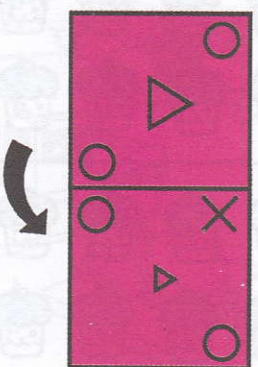

A

1




B

2




C

3




D

4



5






Ar gali sužinoti, kaip atrodys daiktai, pateikti kairėje, žiūrint į juos iš viršaus? Apibrėžk reikiamą paveikslėlį.




A



1



2



3



B



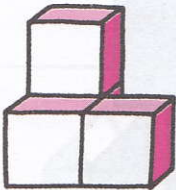
1




2




3




C



1



2



3




D



1



2



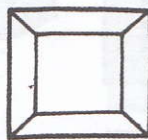
3




E



1



2



3



F



1




2





3





Ar gali išsiaiškinti, kokia figūra susidarys, jei sujungsi kairėje pusėje pateiktas dalis? Sujunk figūrą su jai priklausančiomis dalimis.





A




B



C




D




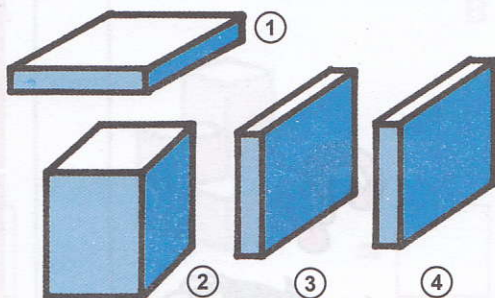





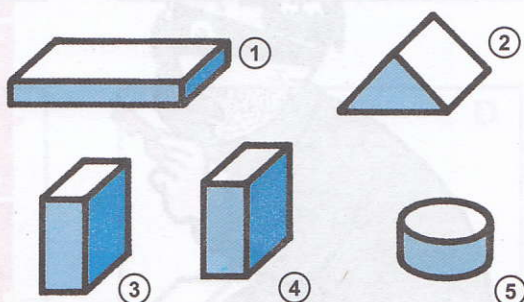
Apācioje duoti penki figūru rinkiniai. Ar gali pažymēti vienā daļi kiekvienamē rinkinijē, kuris nēra sudarytoje figūrōje?



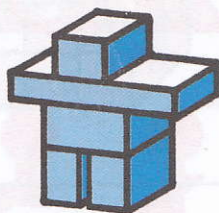
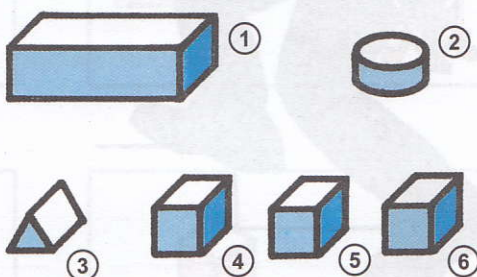
A




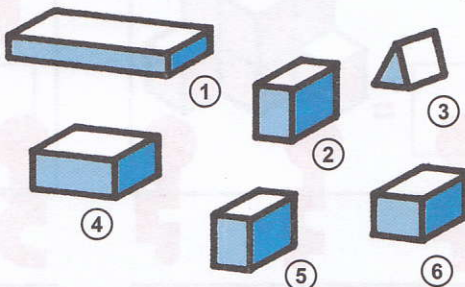
B



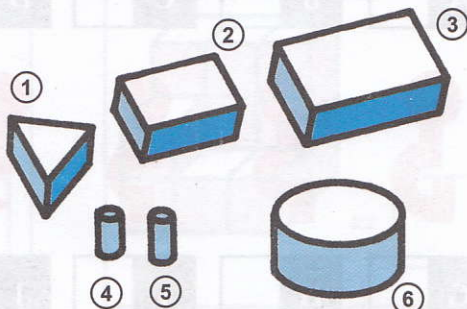
C




D




E





Vagišius Tomas ketina apvogti Dr. Kolina. Jis turi raktų ryšulį, bet negali surasti, kuris raktas tinka durų spynai. Ar gali jam padėti?



A	B	C	D	E	F
---	---	---	---	---	---




G	H	I	J	K	L
---	---	---	---	---	---




Ar gali suskaičiuoti blokelius, pateiktus aštuoniuose paveikslėliuose rinkiniuose apačioje?


A




B




C




D



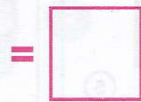
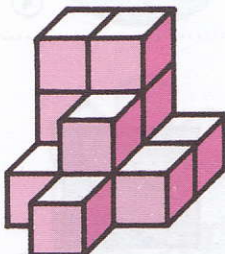
E



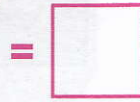

F



G


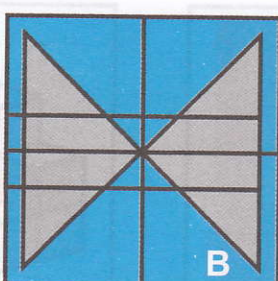
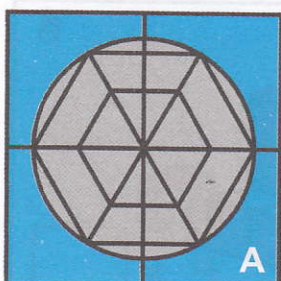


H






Trijuose paveikslėlių rinkiniuose, pateiktuose apačioje, surask, kuri dalis yra nepanaudota formuojant figūrą.



①




①



①



②



②



②



③



③



③



④



④



④



⑤




⑤



⑤

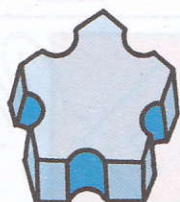
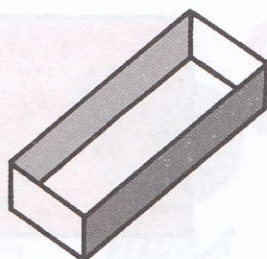


Kairiajame stulpelyje esančios figūros yra deformuotos. Ar gali jas sujungti su jų tikrosiomis formomis, pateiktomis dešiniajame stulpelyje.



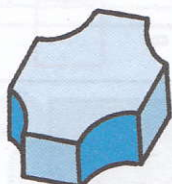
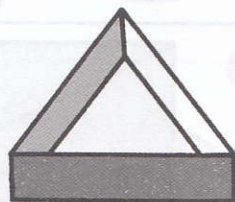
A

1




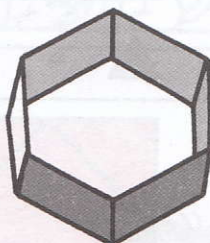
B

2




C

3



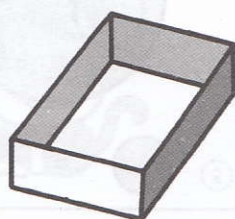
D

4




E

5



F


6



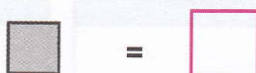



Suskaičiuok geometrines figūras,  
kiekvienos figūros, pateiktos apačioje.


A



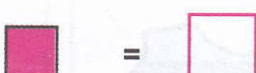

B




C



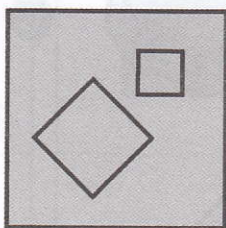
D



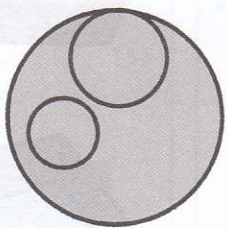
E




F



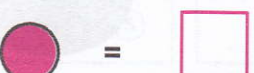

G




H



I

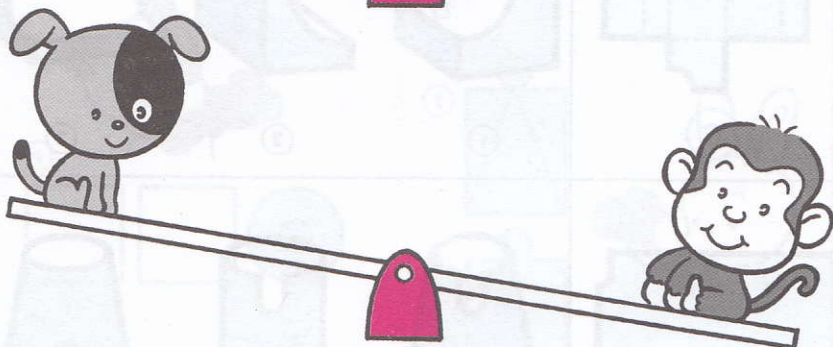
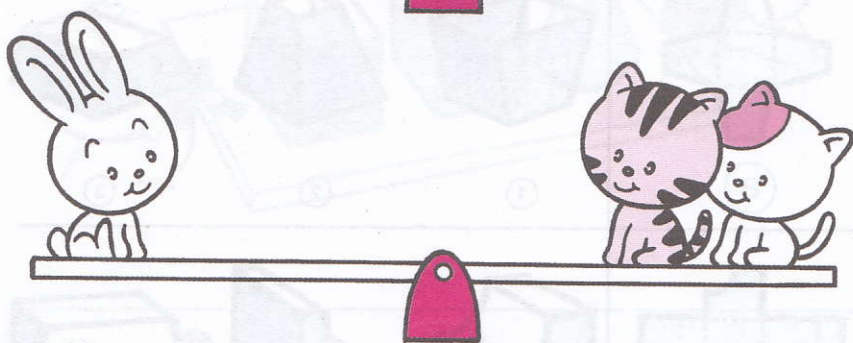



J





Ar tau teko sūptis sūpynėse? Ar gali pasakyti, kas iš jų yra sunkiausias? Pažymėk apačioje reikiamą paveiksluką.



①



②















③



④




Kokias formas įgaus figūros, duotos kairėje pusėje, jeigu jas sulenksime. Pagalvok ir apibrauk reikiamą formą.













 <p>(A)</p>	 <p>(1) (2) (3)</p>
 <p>(B)</p>	 <p>(1) (2) (3)</p>
 <p>(C)</p>	 <p>(1) (2) (3)</p>
 <p>(D)</p>	 <p>(1) (2) (3)</p>
 <p>(E)</p>	 <p>(1) (2) (3)</p>
 <p>(F)</p>	 <p>(1) (2) (3)</p>





Keturi draugai – Panda, Katytė, Triušelis ir Paršelis – nufotografavo keletą nuotraukų. Ar gali sužinoti, kokios tai nuotraukos?



<p><b>A</b></p>  <p>1</p>  <p>2</p> 	<p><b>B</b></p> <p>1</p>  <p>2</p>  
<p><b>C</b></p>  <p>1</p>  <p>2</p> 	<p><b>D</b></p> <p>1</p>  <p>2</p>  

# ATSAKYMAI

1) A-2, B-3, C-1



3) A-2, B-3, C-1,  
D-2, E-2, F-3

4) A-3  
B-1  
C-3  
D-1  
E-3

5) A-3, B-2, C-3,  
D-1, E-1, F-2

6) A-3, B-1, C-2,  
D-5, E-4

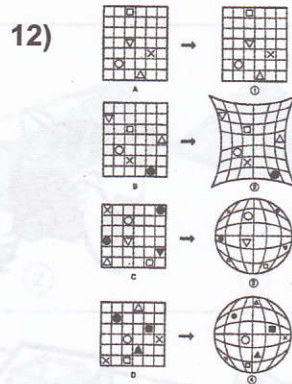
7) A-4, B-2

8) A-1,4  
B-2,4  
C-2,4  
D-1,2  
E-1,3

9) A-2,5; B-1,4;  
C-1,3; D-3,5;  
E-2,4; F-1,3

10) A-4  
B-1  
C-1  
D-4

11) A-3, B-2, C-1,  
D-2, E-3, F-1



13) A-6, B-4, C-5,  
D-2, E-3, F-1

14) A-1,  
B-2,  
C-3,  
D-2,  
E-1,  
F-1

15) A-3, B-2, C-3,  
D-1, E-3

16) A-1, B-1, C-4,  
D-2, E-3, F-1

17) A-3, B-2, C-1,  
D-2, E-3, F-2

18) A-1, B-2, C-1,  
D-3, E-1


19) A-2, B-1, C-2,  
D-3, E-1, F-3

20) A-1,5; B-1+3;  
C-2,4; D-1,3,4;  
E-1,3,5

21) A-1, B-2, C-3,  
D-1, E-2, F-1

- 22) A-6, B-5, C-1,  
D-3, E-2, F-4
- 23) A-3, B-2, C-3,  
D-1, E-2, F-1
- 24, 25) A-2, B-3, C-1,  
D-5, E-6, F-4
- 26) A-2, 5  
B-2, 4  
C-3, 5
- 27) A-2  
B-2  
C-2  
D-1  
E-2  
F-3
- 28) A-4, B-1, C-2
- 29) A-2, 4    B-1, 3
- 30) A-3
- 31) A-2, B-1, C-1,  
D-2, E-2
- 32) A-3, B-2, C-3, D-1
- 33) A-2, B-1, C-5,  
D-3, E-4
- 34) A-4
- 35) 1-7  
2-6  
3-7  
4-9
- 36) A-5, B-1, C-2, D-3
- 37) A-1, B-2, C-3,  
D-2, E-1, F-1
- 38) A-4, B-3, C-1, D-2
- 39) A-2, B-5, C-2,  
D-3, E-6
- 40) A-12, B-2, C-11, D-4,  
E-7, F-6, G-9, H-8,  
I-1, J-3, K-10, L-5
- 41) A-6  
B-7  
C-9  
D-7  
E-11  
F-11  
G-12  
H-13
- 42) A-4, B-3, C-1
- 43) A-2, B-4, C-5  
D-1, E-6, F-3
- 44) A-2            B-4  
C-3            D-3  
E-4            F-3  
G-3            H-9  
I-3            J-6
- 45) 2
- 46) A-1, B-2, C-1  
D-2, E-3, F-1
- 47) A-1, B-1,  
C-2, D-2

Kiekvienam paveikslėliui nuo A iki F surask visiškai priešingą vaizdinį tarp trijų, pateiktų dešinėje.



Kiekvienoje eilutėje du iš keturių paveikslėlių yra kažkuo panašūs. Ar gali juos apibraukti?



Šios serijos išleista

